



science
& technology

Department:
Science and Technology
REPUBLIC OF SOUTH AFRICA

SOUTHERN AFRICAN SENIOR MATHEMATICS OLYMPIAD

FEMSSISA

(SASMO)

GRADE TEN

FINAL ROUND

DATE: 11 OCTOBER 2018

TIME: 120 MINUTES

Instructions:

1. This booklet has 20 questions.
2. Use the answer sheet provided.

Write the answer in the block provided
3. All working details must be done in the space provided.
3. Calculators are not permitted.
4. Diagrams are not necessarily drawn to scale.
5. The first 15 problems carry one mark each and the next 5 carry 2 marks each.
6. You have 120 minutes for the paper which works out to an average of 6 minutes per question.
7. Read the questions carefully before answering.

Visit the website: www.femssisa.org.za



FEMSSISA

NON PROFIT COMPANY
REGISTRATION NO: 2015/050119/08



Grade Ten Mathematics Olympiad Final Round 2018

1. What is the value of $(0.3^4 \div (0.03)^2)$

2. Write down the unit's digit of:-

$$137^3 + 25^5 \times 4^5 - 27^3$$

3. If $a = \frac{1}{1-2b}$ and $b = \frac{1}{1-2c}$ then write 'a' in terms of 'c'.

4. Write in its simplest form

$$\frac{x}{(3y+1)(3y-1)} - \frac{x}{y(3y+1)} + \frac{x}{y(1-3y)}$$

5. Evaluate $1000^2 - 998^2 + 996^2 - 994^2 + \dots + 4^2 - 2^2$

6. The graph of $y = \frac{-x+a}{x+b}$ passes through $(-1;0)$ and $(-4;-3)$.

Find the numerical value of $a + b$

7. Evaluate $29\frac{1}{6} \times 30\frac{1}{10}$

8. Two cyclists, each cycling at a their own constant speeds around an cycling track complete 10 and 20 rounds in 1 hour. If they start together from the same starting point and cycle in the opposite directions then determine then how many times they pass each other?

9. 80 litres of a mixture was water. How many litres of concentrate must be added so that the mixture has 50% concentrate?

10. If $6^{x+1} = 3$ then write down the value of 36^x

11. Write down the ordered pair $(x;y)$ which is the common solution of both equations:-

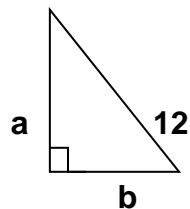
$$\frac{6}{x-1} + \frac{4}{y+1} = 12 \quad \text{and} \quad \frac{2}{x-1} - \frac{4}{1-y} = 4$$

12. What is the units digit of the following ?

$$199^{10} + 16^{10} - 99^{10}$$

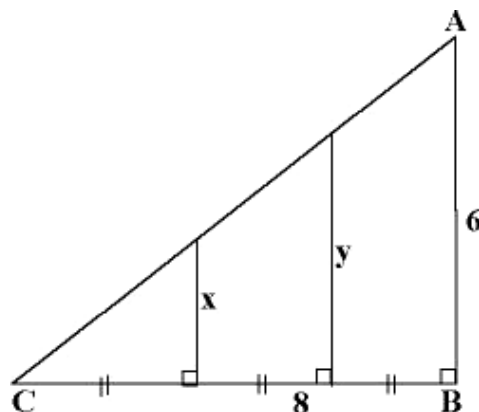
13. In the triangle below $a - b = 6$

Calculate the area of the triangle independent of a and b



14. In the figure below $AB = 6$ and $BC = 8$. Calculate the value of

$(x + y)$.



15. The difference of the squares of 2 consecutive even numbers is t . What is the larger of the two numbers in terms of t ?

16. Each person in a group of 50 is either blue or brown eyed.

In addition you are given the following information:

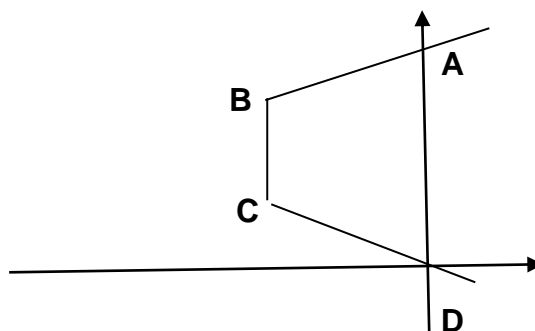
14 are blue-eyed females

31 are males

23 people have brown eyes

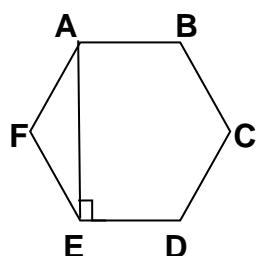
How many males have blue eyes?

17. C and B are the y-intercepts and $CB \parallel AD$. The equation of CB is $x = -3$ and BA is $y = x + 9$ and the area of ABCD is $\frac{33}{2}$ square units. Determine the equation of DC.

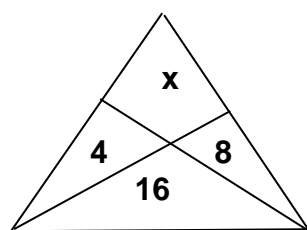


18. A vendor has 4 weights which must be used to weigh items from 1kg to 15kg without balancing with the weights. What are the 4 weights?

19. In the following regular hexagon $AE = 6\sqrt{3}$ cm. Determine the area of AEDB.



20. In the triangle ABC determine the value of x if the areas of the 3 regions are given.



MARKS: 1-15: $15 \times 1 = 15$

16-20: $5 \times 2 = 10$

TOTAL: 25